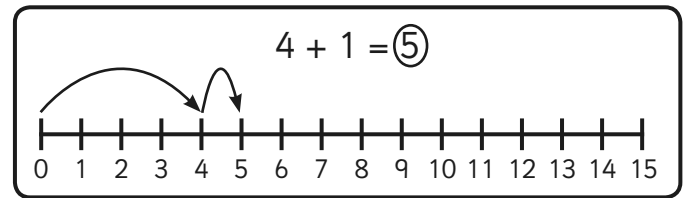
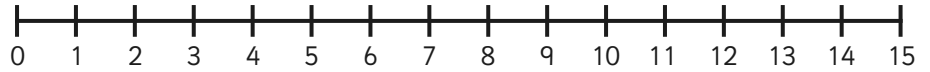


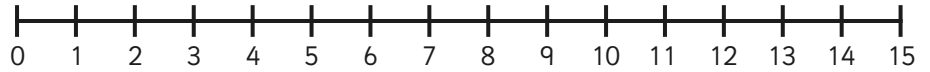
Addition to 20 on a Number Line



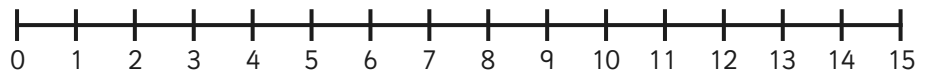
1. $5 + 3 =$



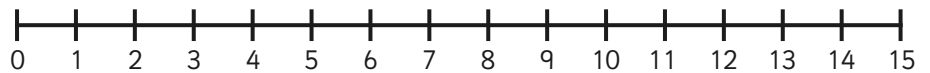
2. $8 + 3 =$



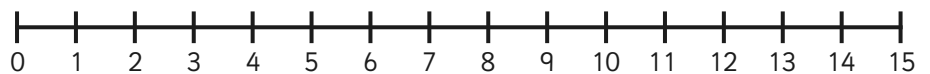
3. $6 + 6 =$



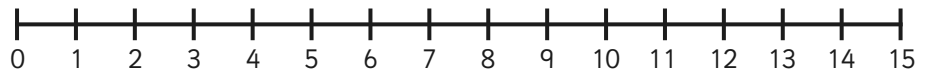
4. $4 + 5 =$



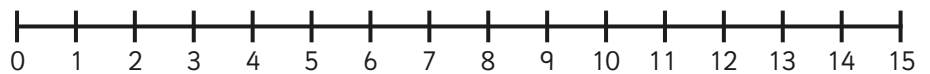
5. $4 + 7 =$



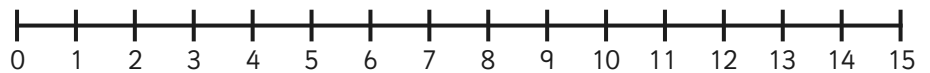
6. $7 + 6 =$



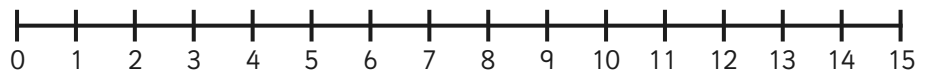
7. $8 + 4 =$



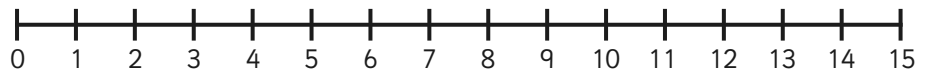
8. $9 + 6 =$



9. $3 + 9 =$

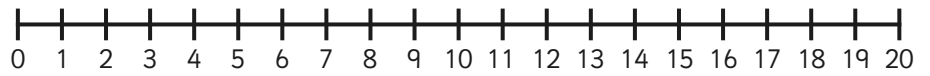


10. $2 + 10 =$

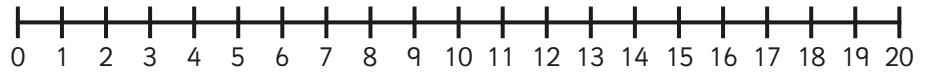


Addition to 20 on a Number Line - Sheet 2

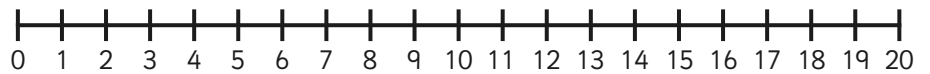
1. $10 + 7 =$



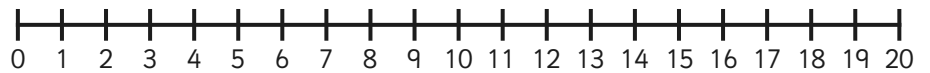
2. $11 + 8 =$



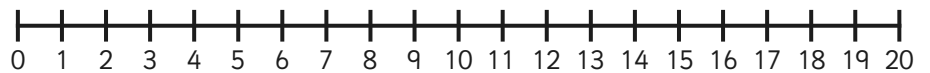
3. $16 + 3 =$



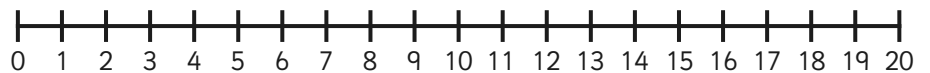
4. $2 + 12 =$



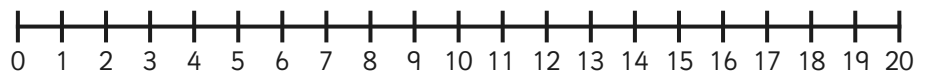
5. $0 + 13 =$



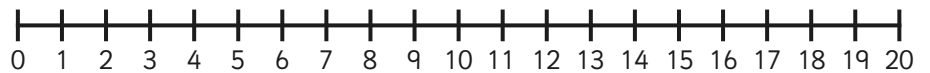
6. $8 + 12 =$



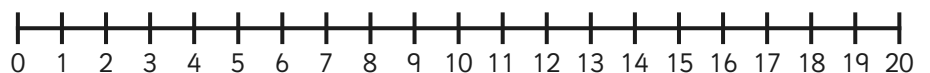
7. $7 + 9 =$



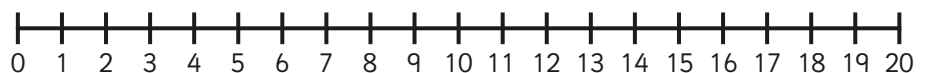
8. $15 + 2 =$



9. $6 + 14 =$



10. $11 + 4 =$

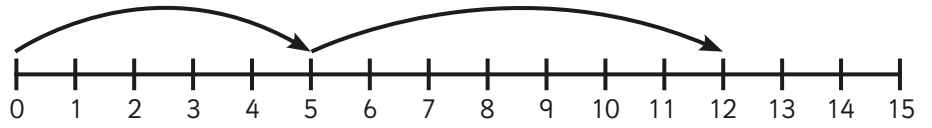


Addition to 20 on a Number Line - Sheet 3

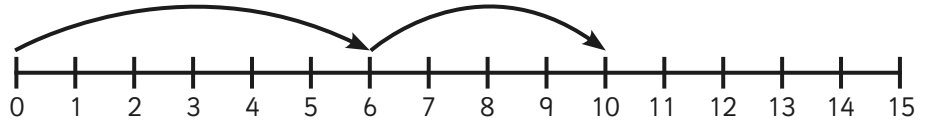
For these questions, can you work out which sums are being shown on the number lines?

The first one has been done for you.

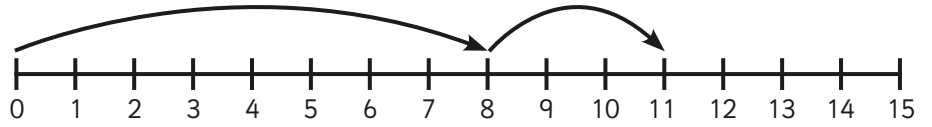
1. $5 + 7 = 12$



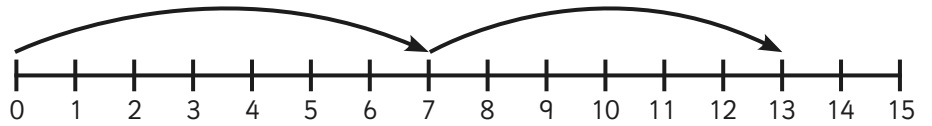
2. $\square + \square = \square$



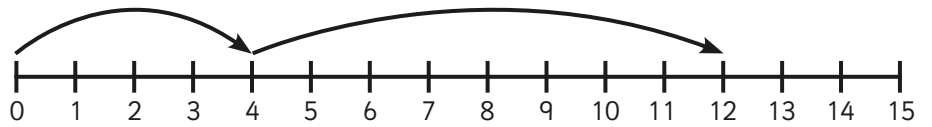
3. $\square + \square = \square$



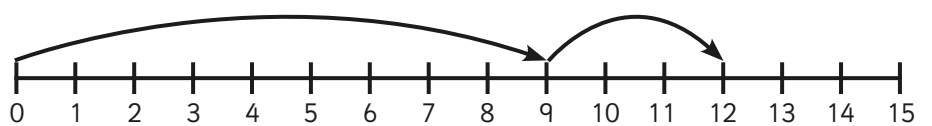
4. $\square + \square = \square$



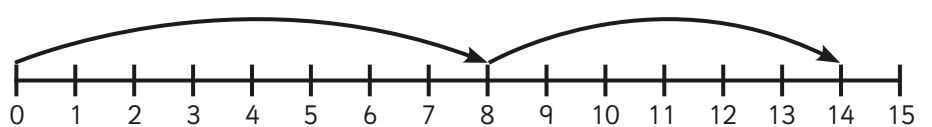
5. $\square + \square = \square$



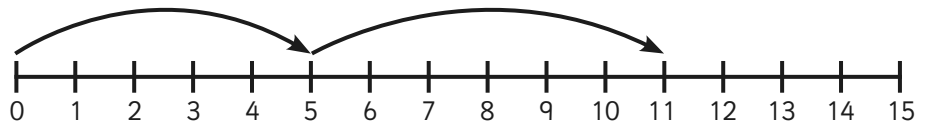
6. $\square + \square = \square$



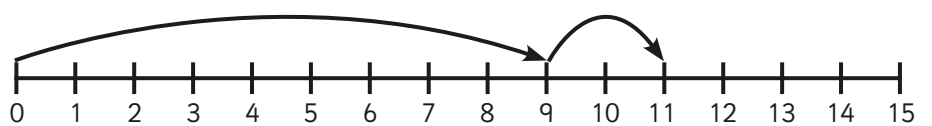
7. $\square + \square = \square$



8. $\square + \square = \square$



9. $\square + \square = \square$



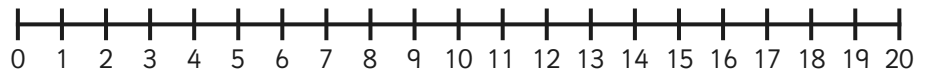
10. $\square + \square = \square$



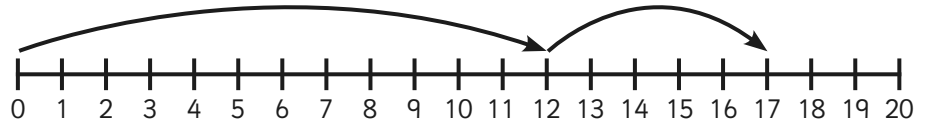
Addition to 20 on a Number Line - Sheet 4

Practice what you have learned so far on a number line to 20 and progress to see if you can draw your own number line!

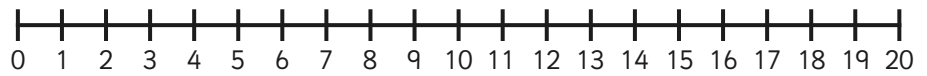
1. $11 + 4 = \square$



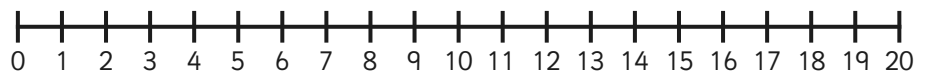
2. $\square + \square = \square$



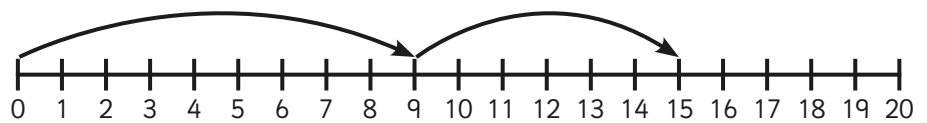
3. $8 + 9 = \square$



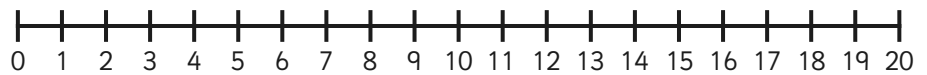
4. $6 + \square = 9$



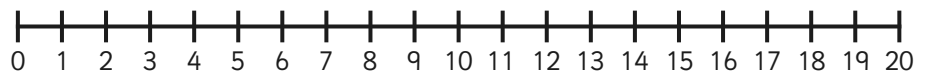
5. $\square + \square = \square$



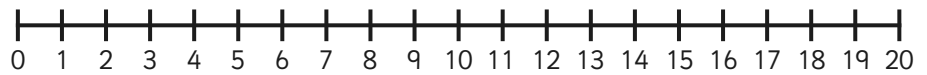
6. $\square + 7 = 11$



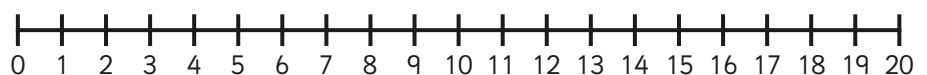
7. $9 + 9 = \square$



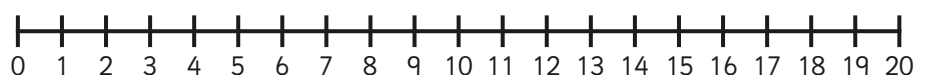
8. $12 + 3 = \square$



9. $7 + 9 = \square$



10. $13 + 5 = \square$



Addition to 20 on a Number Line: Answers

question	answer
Sheet 1.	
1	8
2	11
3	12
4	9
5	11
6	13
7	12
8	15
9	12
10	12
Sheet 2.	
1	
2	
3	
4	
5	
6	
7	
8	
9	
10	
Sheet 3.	
2	$6 + 4 = 10$
3	$8 + 3 = 11$
4	$7 + 6 = 13$
5	$4 + 8 = 12$
6	$9 + 3 = 12$
7	$8 + 6 = 14$
8	$5 + 6 = 11$
9	$9 + 2 = 11$
10	$8 + 7 = 15$

question	answer
Sheet 4.	
1	$11 + 4 = 15$
2	$12 + 5 = 17$
3	$8 + 9 = 17$
4	$6 + 3 = 9$
5	$9 + 6 = 15$
6	$4 + 7 = 11$
7	$9 + 9 = 18$
8	$12 + 3 = 15$
9	$7 + 9 = 16$
10	$13 + 5 = 18$